

Number Line Addition to 10

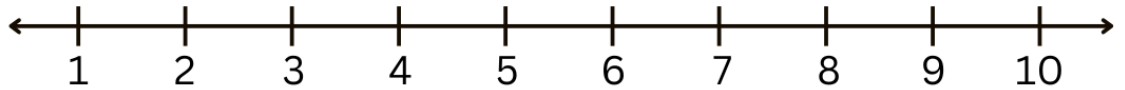
Example

$2 + 2$

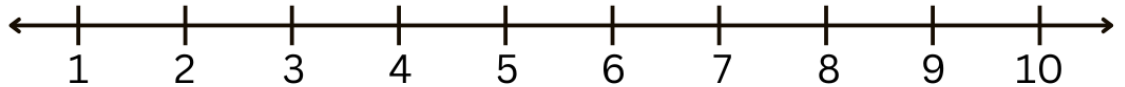


Use the number lines to solve each addition problem and circle the correct answer.

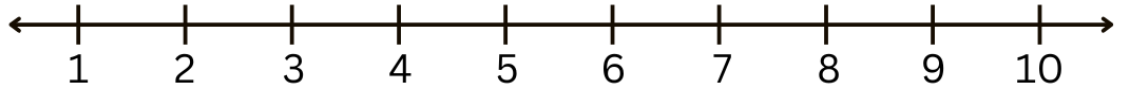
$8 + 1 =$




$6 + 4 =$



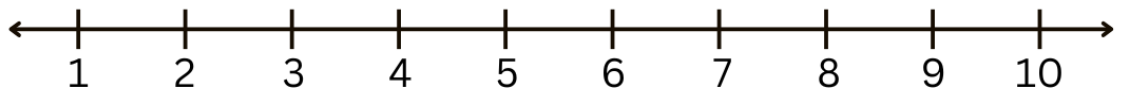
$3 + 3 =$



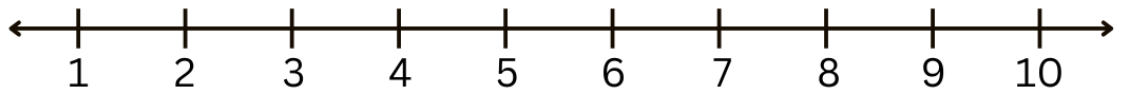
$4 + 1 =$



$7 + 1 =$



$8 + 2 =$



$1 + 6 =$

